




## 3.1.6 Protista e.g. Amoeba

### Self Assessment

#### Where is your learning at?

Green: I know it all  
Orange: I have some idea – check the answers  
Red: I need to start studying this section

	<b>CAN YOU</b>	<b>Green</b> 	<b>Orange</b> 	<b>Red</b> 
1	Draw a labelled diagram of Amoeba			
2	Explain the function of the labelled parts			